

WONDERKIDS

Pictographs, Graphs


Class VI, Mathematics

Q1. The given pictograph shows the number of star stickers achieved by five children in a month. Who got the maximum number of star stickers?



- A. Riya B. Priya C. Amit D. Sam

Q2. The given pictograph shows the number of students in each section of class 2. How many total number of students are there in class 2 ?



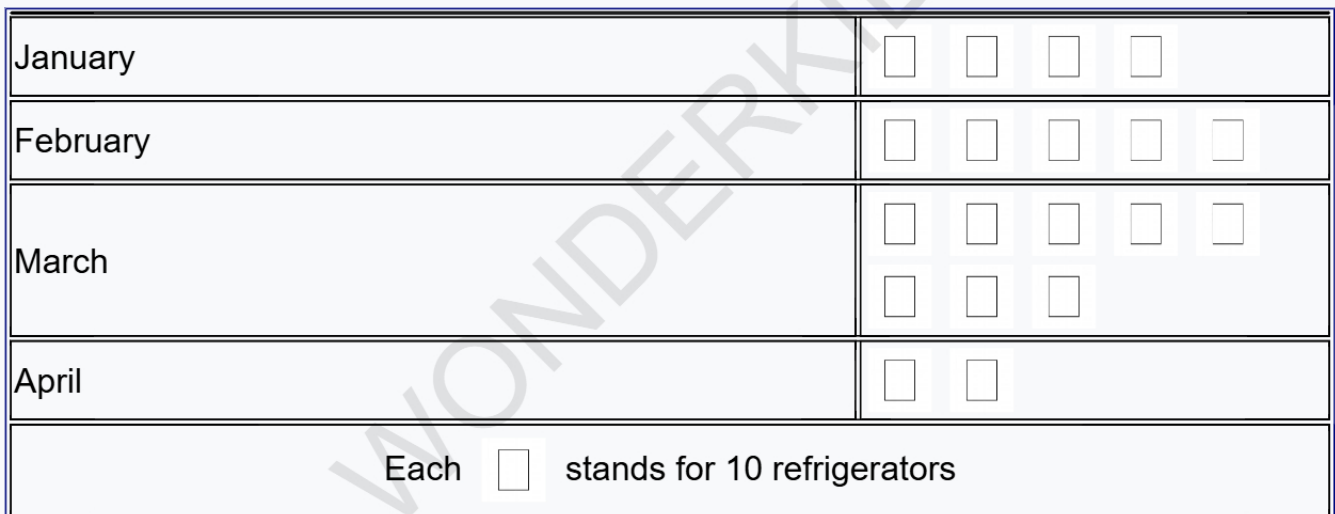
- A. 176 B. 144 C. 104 D. 120

Q3. The given pictograph shows the number of star stickers achieved by five children in a month. Who got the minimum number of star stickers?




- A. Priya B. Riya C. Sam D. Amit

Q4. The given pictograph shows the number of refrigerators Mr Sharma sold in 4 different months. In which month were the fewest refrigerators sold?



- A. April B. February C. January D. March

Q5. The given pictograph shows the number of students in each section of class 2. Total number of students in class 2-B is ____



- A. 20 B. 60 C. 30 D. 50

Q6. The given pictograph shows the number of star stickers achieved by five children in a month. Who got the maximum number of star stickers?



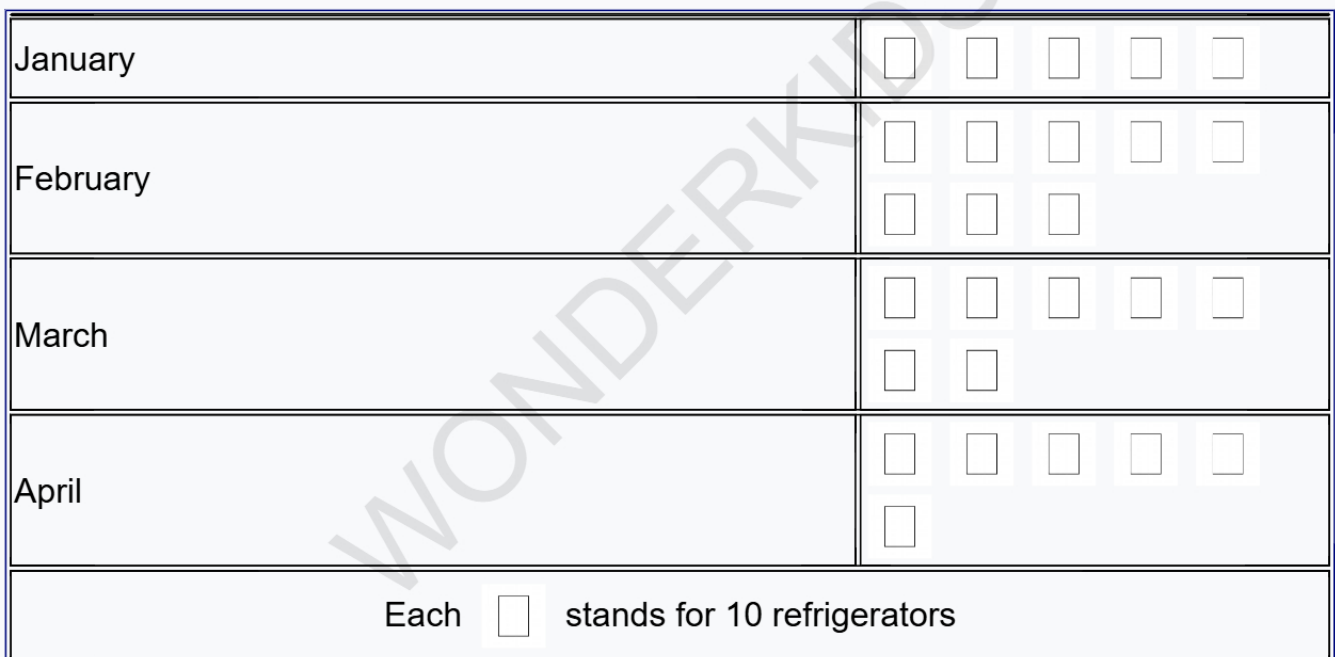
- A. Amit B. Priya C. John D. Sam

Q7. The given pictograph shows the number of star stickers achieved by five children in a month. Who got the maximum number of star stickers?




- A. Amit B. Priya C. Riya D. Sam

Q8. The given pictograph shows the number of refrigerators Mr Sharma sold in 4 different months. How many refrigerators did Mr Sharma sell in February?




- A. 70 B. 90 C. 80 D. 100

Q9. The given pictograph shows the number of students in each section of class 2. Maximum number of students are in _____.



- A. 2-A B. 2-B C. 2-C D. 2-D

Q10. The given pictograph shows the number of students in each section of class 2. Total number of students in class 2-C is _____.



- A. 20 B. 40 C. 10 D. 50

Answer Sheet

Q1. D	Q2. B	Q3. A
Q4. A	Q5. A	Q6. B
Q7. A	Q8. C	Q9. B
Q10. A		