
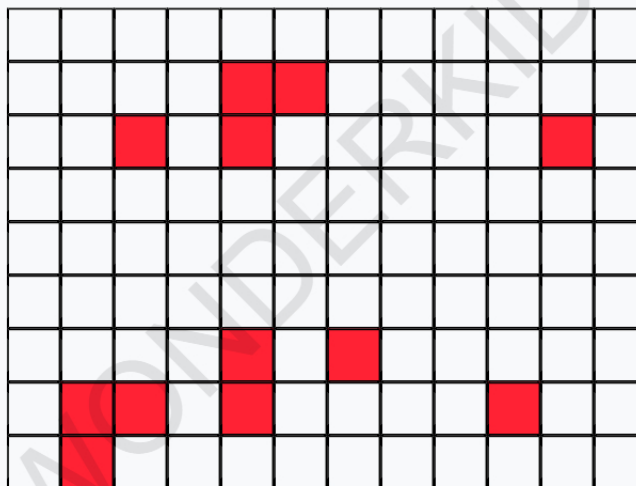


Q1. What is the proportion of shaded region?



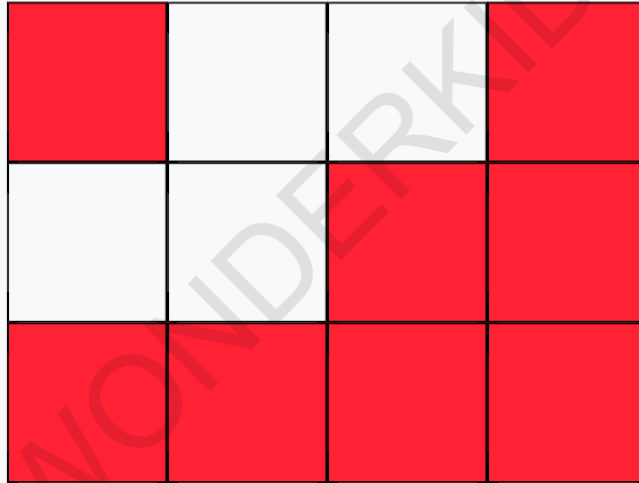
- A. $19/50$ B. $22/50$ C. $41/50$ D. $34/50$

Q2. What is the proportion of shaded region?



- A. $48/108$ B. $93/108$ C. $12/108$ D. $87/108$

Q3. What is the proportion of shaded region?



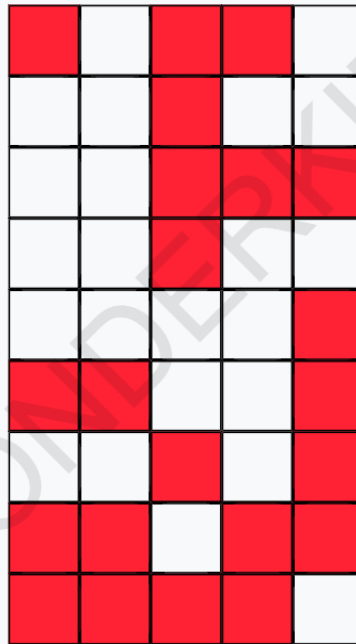
- A. $\frac{7}{12}$ B. $\frac{6}{12}$ C. $\frac{8}{12}$ D. $\frac{3}{12}$

Q4. What is the proportion of shaded region?



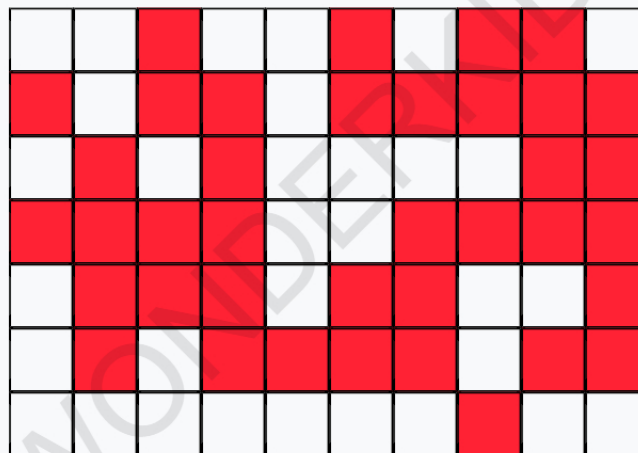
- A. $\frac{4}{12}$ B. $\frac{1}{12}$ C. $\frac{6}{12}$ D. $\frac{11}{12}$

Q5. What is the proportion of shaded region?



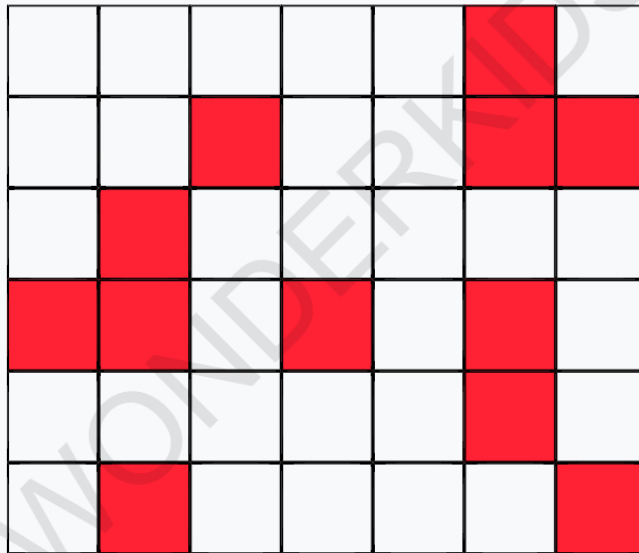
- A. $19/45$ B. $22/45$ C. $15/45$ D. $12/45$

Q6. What is the proportion of shaded region?




- A. $30/70$ B. $41/70$ C. $33/70$ D. $38/70$

Q7. What is the proportion of shaded region?



- A. $\frac{22}{42}$ B. $\frac{31}{42}$ C. $\frac{15}{42}$ D. $\frac{12}{42}$

Q8. What is the proportion of shaded region?



- A. $\frac{49}{54}$ B. $\frac{23}{54}$ C. $\frac{45}{54}$ D. $\frac{53}{54}$

Q9. What is the proportion of shaded region?



- A. $\frac{4}{8}$ B. $\frac{5}{8}$ C. $\frac{8}{8}$ D. $\frac{6}{8}$

Q10. What is the proportion of shaded region?



- A. $\frac{5}{11}$ B. $\frac{6}{11}$ C. $\frac{7}{11}$ D. $\frac{10}{11}$

Answer Sheet

Q1. B	Q2. C	Q3. C
Q4. C	Q5. B	Q6. D
Q7. D	Q8. D	Q9. D
Q10. C		