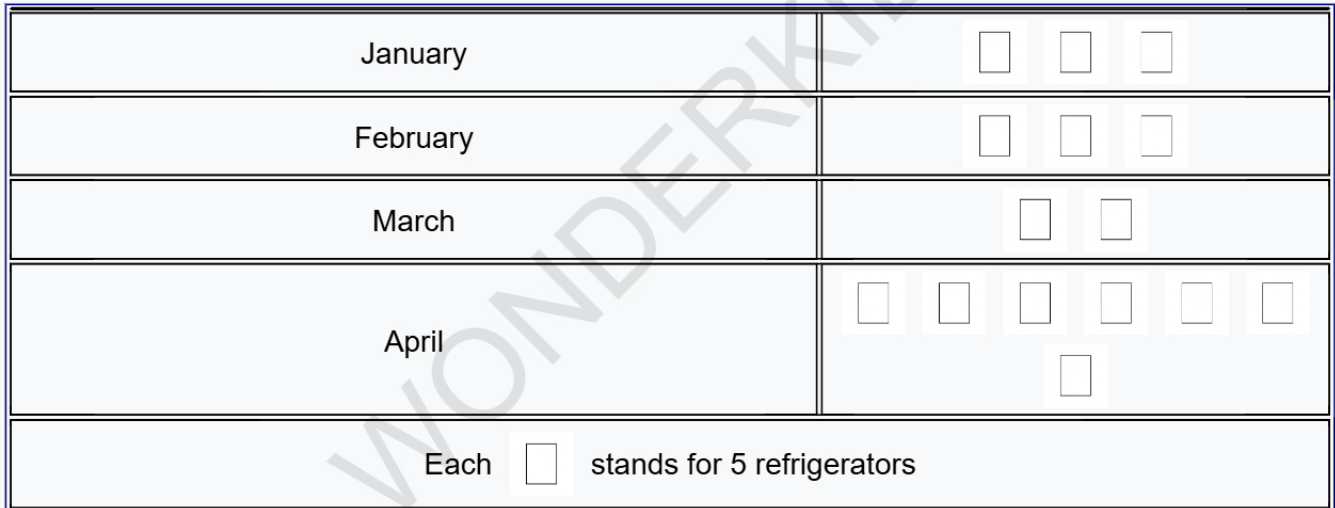


Q1. The given pictograph shows the number of refrigerators Mr Sharma sold in 4 different months. In which month were the most refrigerators sold?



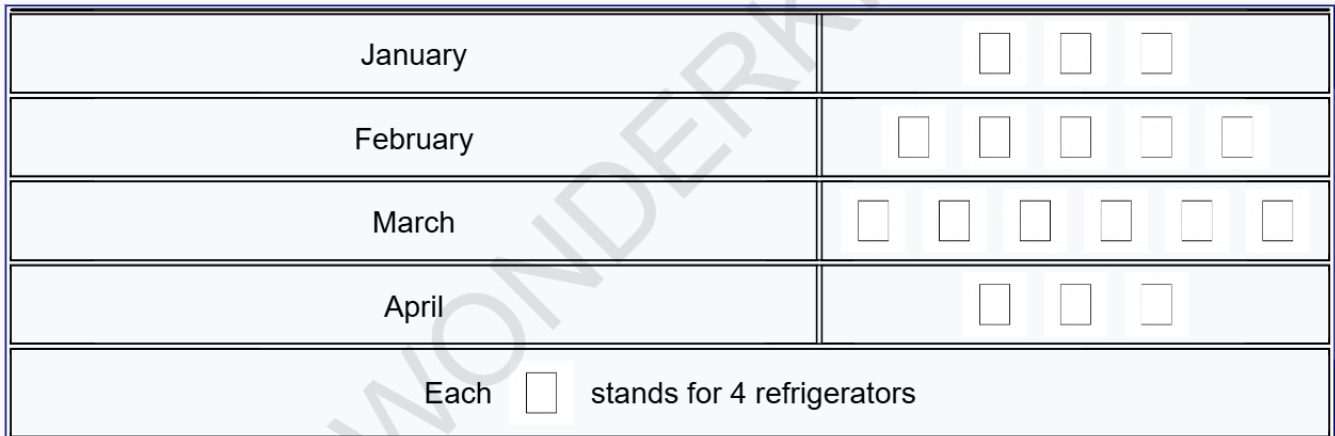
- A. January B. February C. March D. April

Q2. The given pictograph shows the number of star stickers achieved by five children in a month. How many more star stickers did Priya get than John?



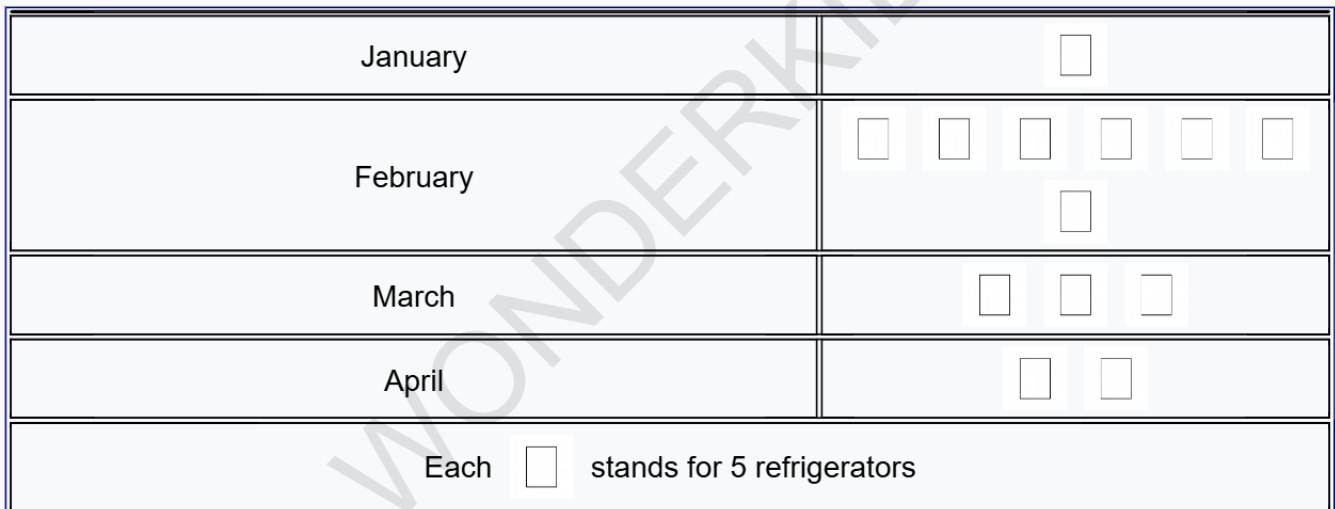
- A. 4 B. 8 C. 16 D. 20

Q3. The given pictograph shows the number of refrigerators Mr Sharma sold in 4 different months. How many refrigerators did Mr Sharma sell in March?



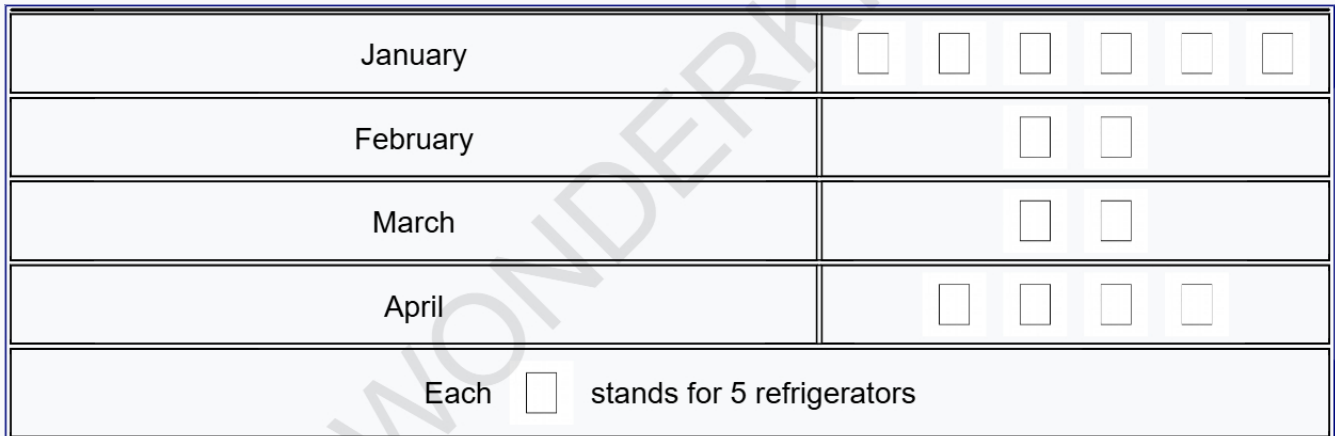
- A. 24 B. 36 C. 32 D. 12

Q4. The given pictograph shows the number of refrigerators Mr Sharma sold in 4 different months. How many more refrigerators were sold in March than in January?



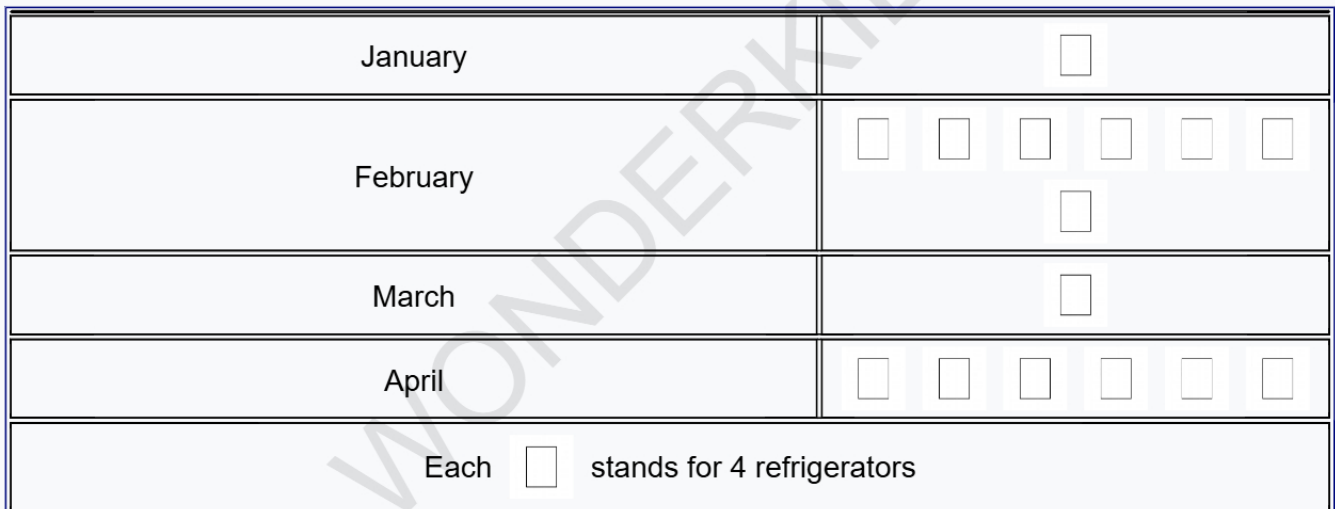
- A. 20 B. 25 C. 5 D. 10

Q5. The given pictograph shows the number of refrigerators Mr Sharma sold in 4 different months. How many refrigerators did Mr Sharma sell in March?



- A. 10 B. 20 C. 5 D. 15

Q6. The given pictograph shows the number of refrigerators Mr Sharma sold in 4 different months. How many refrigerators did Mr Sharma sell in February?



- A. 16 B. 32 C. 20 D. 28

Q7. The given pictograph shows the number of star stickers achieved by five children in a month. Who got the maximum number of star stickers?




- A. Riya B. Sam C. Priya D. Amit

Q8. The given pictograph shows the number of star stickers achieved by five children in a month. Who got the maximum number of star stickers?




- A. Amit B. Priya C. John D. Riya

Q9. The given pictograph shows the number of students in each section of class 2. Total number of students in class 2-B is ____



- A. 35 B. 25 C. 20 D. 10

Q10. The given pictograph shows the number of students in each section of class 2. Maximum number of students are in ____.



- A. 2-A B. 2-B C. 2-C D. 2-D

Answer Sheet

Q1. D	Q2. B	Q3. A
Q4. D	Q5. A	Q6. D
Q7. A	Q8. A	Q9. C
Q10. B		